

Maverick Math Superstars

U Full Name: _____

U Teacher: _____

PTA SPONSORED



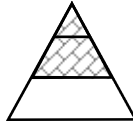

Someone may read the problem to you and demonstrate a **SIMILAR** problem, but you should work the problems yourself. **SCORING:** 20 horseshoe points per assignment. Two for Full Name and Teacher and 18 for problems. Horseshoe values are printed before each problem. Every problem varies, so read each one carefully! Worksheets are to be turned into the Maverick Math box anytime during the week but **before 8:30 a.m. on Friday (or 12:30 for PM Kindergarten).**

DUE 02/19/10
Sheet 1.12

LAST MATH SHEET—THANKS FOR PARTICIPATING!

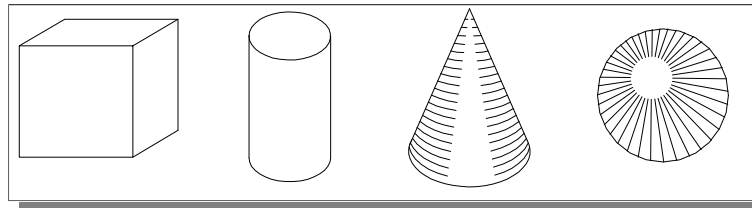


1. Circle the shape that does **NOT** show $\frac{2}{3}$ as equal parts.



2. Draw lines from the object to the shape that it matches.

1/2 horseshoe for each correct match.



cube

cylinder

cone

sphere



Answer the questions using the pictures above.

1/2 horseshoe for each correct answer.

A) The salt shaker is shaped like a _____.

B) The party hat is shaped like a _____.



3. Ms. Stobaugh put away 4 books and 3 magazines. After a while she put away 2 more books. Write a number sentence to show how many more books than magazines Ms. Stobaugh put away.

One horseshoe for work shown.
One horseshoe for correct answer.

_____ more books



4. Label each line as odd or even numbers.

1/2 horseshoe for each correct answer.

A) _____ 3, 5, 7, 9

C) _____ 13, 21, 5, 1

B) _____ 10, 12, 14, 16

D) _____ 25, 35, 45, 55





One horseshoe each for work shown.
One horseshoe each for correct answer.


5. Ms. Burt bought 2 boxes of donuts. Each box has 10 donuts. She invited 7 kids for a treat. (Write the number sentence and solve.)

A) If each child eats 2 donuts, will Ms. Burt have enough to share with everyone?

B) If each child wants a third donut, will there be enough to go around?



6. Ms. Miner's class has read 150 books altogether. Use the pictograph to answer the questions.

Each  = 10 books



A) How many mystery books were read? _____ books

B) How many poetry books were read? _____ books

C) How many more adventure books than poetry books were read?

_____ books

D) Which type of books were read most often by Ms. Miner's class?

_____ books



A&B: 1/2 horseshoe for each correct answer.



C: One horseshoe for work shown.
One horseshoe for correct answer.



1/2 horseshoe for each correct answer.

7. Fill in the blank with + or - to make the number sentences true.

