

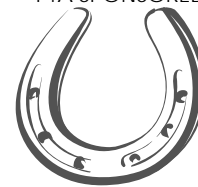


# Maverick Math Superstars

U My Full Name: \_\_\_\_\_

U Teacher: \_\_\_\_\_

PTA SPONSORED



DUE 12/16/11

Sheet K.12

Someone may read the problem to you and demonstrate a **SIMILAR** problem, but you should work the problems yourself. **SCORING:** 20 horseshoe points per assignment. Two for Full Name and Teacher and 18 for problems. Horseshoe values are printed before each problem. Every problem varies, so read each one carefully! Worksheets are to be turned into the Maverick Math box anytime during the week but **before 8:30 a.m. on Friday.** **PRINTED AT HOME**

## LAST MATH SHEET—THANKS FOR PARTICIPATING!



One horseshoe for each correct answer.

1. Write the number that is missing.

74 \_\_\_\_\_ 76

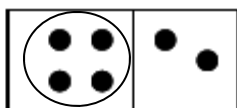
86 \_\_\_\_\_ 88

98    99 \_\_\_\_\_

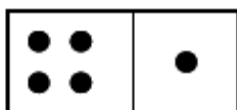
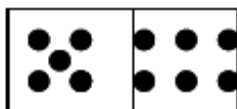
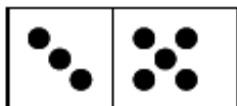


One horseshoe for each correct answer.

2. Circle the number that is larger on each domino. Write the number on the line in words. The first one is done for you.



Four



One horseshoe for each correct answer.

3. Count the hearts.

How many are small? \_\_\_\_\_

How many are medium? \_\_\_\_\_

How many are large? \_\_\_\_\_





One horseshoe for each correct answer.

4. Answer the following addition problems. Use manipulative if your child needs a visual.

$2 + 2 = \underline{\quad}$

$1 + 3 = \underline{\quad}$

$3 + 5 = \underline{\quad}$

$4 + 6 = \underline{\quad}$



One horseshoe for correct answer.

5. What goes in the empty box to complete the pattern?

|   |    |  |   |    |     |
|---|----|--|---|----|-----|
| A | AB |  | A | AB | ABC |
|---|----|--|---|----|-----|



One horseshoe for correct answer.

6. Which teacher has more candy? \_\_\_\_\_

|                         |                           |
|-------------------------|---------------------------|
| <p>Ms. Woods' Candy</p> | <p>Ms. Renfro's Candy</p> |
|-------------------------|---------------------------|



7. Color the fifth kite.



Two horseshoes for correct answer.

8. Hansel and Gretel were lost in the forest.

They would walk for a while, rest for a while,  
walk for a while, rest for a while,  
walk for a while, rest for a while,  
walk for a while,.....

What will they do next? \_\_\_\_\_

